

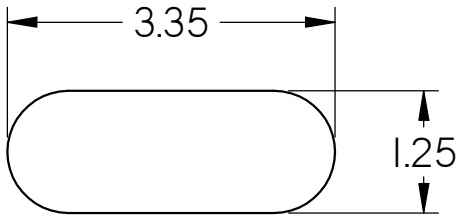
# Geometry Homework

Clark Senior High

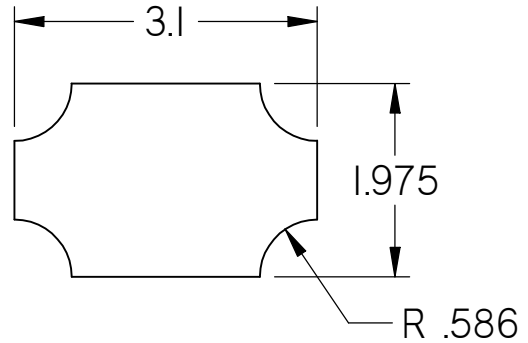
Name \_\_\_\_\_

Hwrk\_Area\_Identify\_parts\_2b.dft

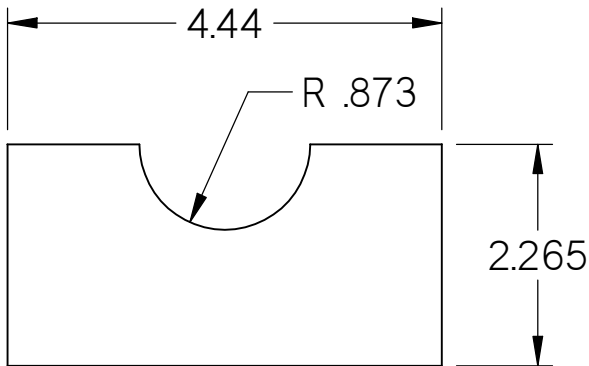
Calculate the Area of the following shapes.



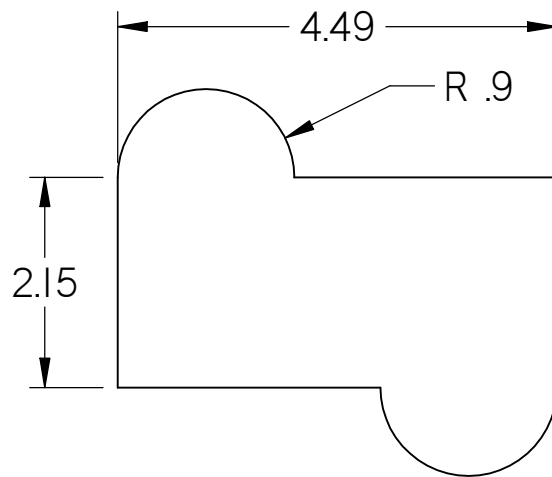
- a. 3.582 square inches
- b. 3.852 square inches
- c. 4.133 square inches
- d. 4.287 square inches




- a. 5.036 square inches
- b. 5.36 square inches
- c. 5.631 square inches
- d. 5.882 square inches



- a. 8.375 square inches
- b. 8.857 square inches
- c. 9.187 square inches
- d. 9.938 square inches



- a. 10.628 square inches
- b. 11.934 square inches
- c. 12.21 square inches
- d. 13.41 square inches



- a. 10.344 square inches
- b. 12.118 square inches
- c. 13.438 square inches
- d. 15.134 square inches